



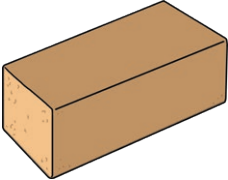




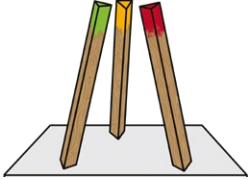


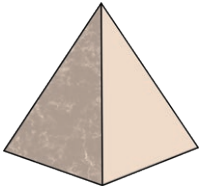





# Identify 2D Shapes and 3D Objects

Using the word bank on the next page, write the correct name of each 2D shape and 3D object below.

 <input type="text"/>	 <input type="text"/>	 <input type="text"/>	 <input type="text"/>
 <input type="text"/>	 <input type="text"/>	 <input type="text"/>	 <input type="text"/>
 <input type="text"/>	 <input type="text"/>	 <input type="text"/>	 <input type="text"/>
 <input type="text"/>	 <input type="text"/>	 <input type="text"/>	 <input type="text"/>

## Word Bank

sphere

circle

square-based  
pyramid

triangular  
prism

octagon

triangle

rectangle

rhombus

cone

cylinder

hexagon

pentagon

cube

circle

rectangular  
prism

cube